

Chapter 6

Impulse and Momentum

Continued

6.3 Collisions in One Dimension

Elastic collisions with arbitrary masses

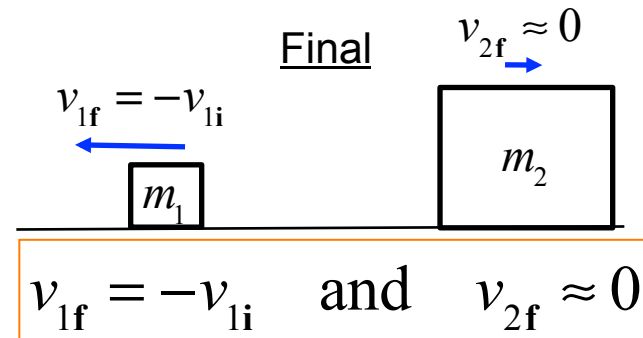
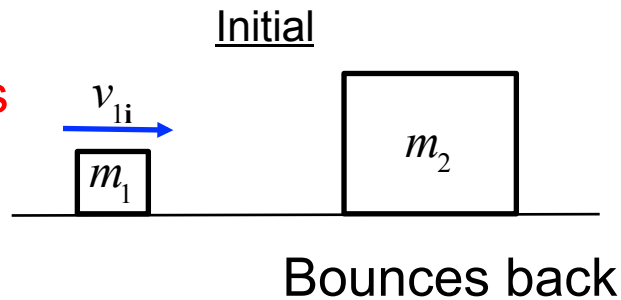
$$v_{1f} = \frac{m_1 - m_2}{m_1 + m_2} v_{1i} \quad \text{and} \quad v_{2f} = \frac{2m_1}{m_1 + m_2} v_{1i}$$

Equal mass
solution is here too

Little mass
hits big mass

$$m_2 \gg m_1$$

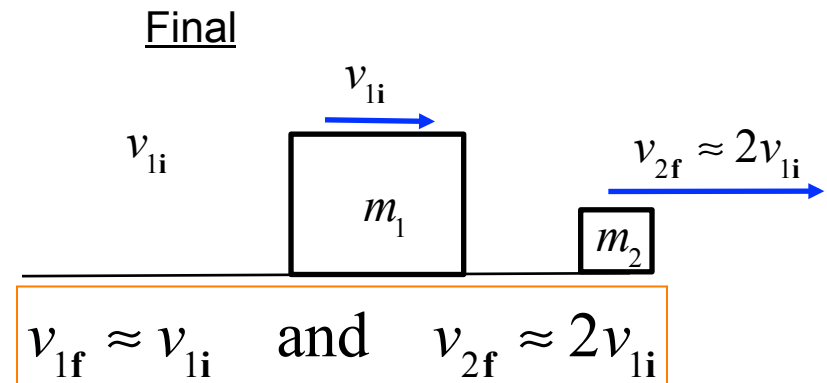
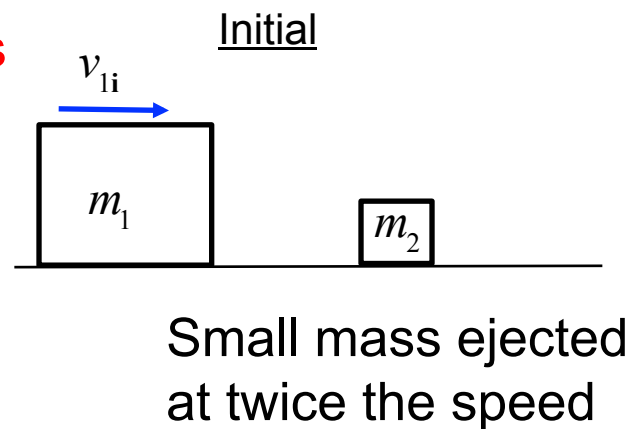
$$\text{Let } m_1 \rightarrow 0$$



Big mass
hits little mass

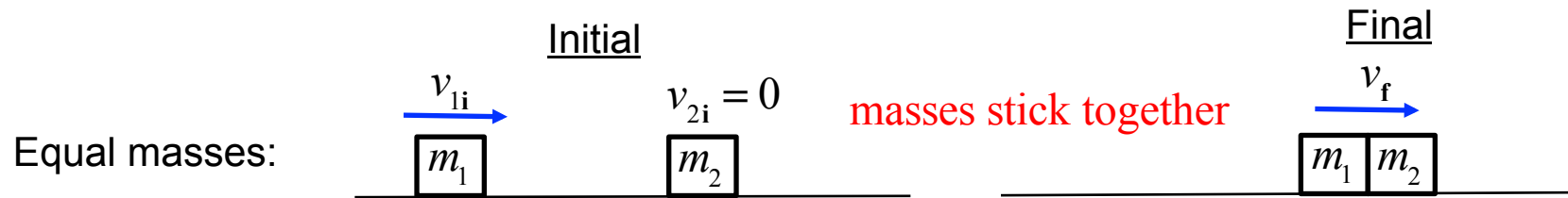
$$m_1 \gg m_2$$

$$\text{Let } m_1 \rightarrow \infty$$



6.3 Collisions in One Dimension

Inelastic collisions (with only internal forces affecting the motion)



(x – components of the velocities)

Momentum conservation: $m_1 v_{1i} = (m_1 + m_2) v_f$

Energy **NOT** conserved:

$$v_f = \frac{m_1}{m_1 + m_2} v_{1i}$$

How much kinetic energy was converted to heat in the collision.

$$K_i = \frac{1}{2} m_1 v_{1i}^2$$

$$K_f = \frac{1}{2} (m_1 + m_2) v_f^2 = \frac{1}{2} (m_1 + m_2) \left[\frac{m_1}{m_1 + m_2} v_{1i} \right]^2$$

$$= \frac{m_1^2}{2(m_1 + m_2)} v_{1i}^2 = \frac{m_1}{m_1 + m_2} \left[\frac{1}{2} m_1 v_{1i}^2 \right]$$

$$= \frac{m_1}{m_1 + m_2} K_i$$

Clicker Question 6.5

A 9-kg object is at rest. Suddenly, it explodes and breaks into two pieces. The mass of one piece is 6 kg and the other is a 3-kg piece. Which one of the following statements concerning these two pieces is correct?

- a) The speed of the 6-kg piece will be one eighth that of the 3-kg piece.
- b) The speed of the 3-kg piece will be one fourth that of the 6-kg piece.
- c) The speed of the 6-kg piece will be one forth that of the 3-kg piece.
- d) The speed of the 3-kg piece will be one half that of the 6-kg piece.
- e) The speed of the 6-kg piece will be one half that of the 3-kg piece.

6.3 Collisions in One Dimension

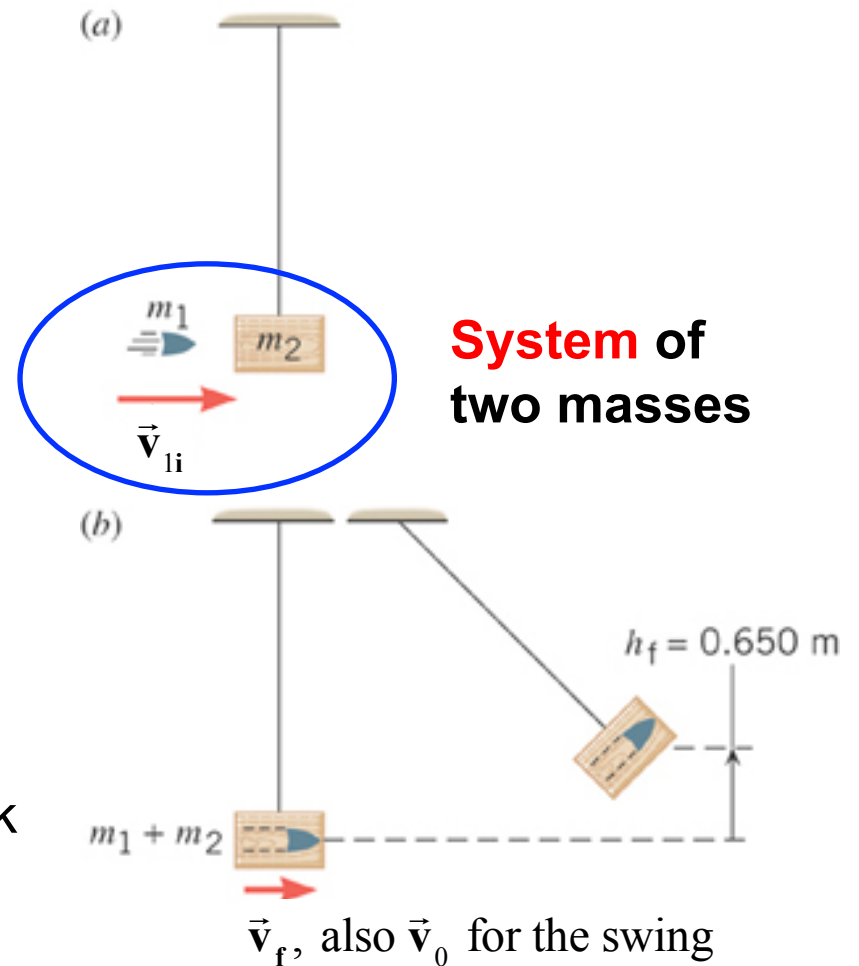
Example: A Ballistic Pendulum

The mass of the block of wood is 2.50-kg and the mass of the bullet is 0.0100-kg. The block swings to a maximum height of 0.650 m above the initial position.

Find the initial speed of the bullet.

Strategy – 1) After the bullet hits the block the swing will conserve energy. From the height determine the starting velocity.

2) Use this velocity as the final velocity of the collision. Then momentum conservation determines the bullet's initial velocity.



6.3 Collisions in One Dimension

Apply conservation of energy to the swinging motion:

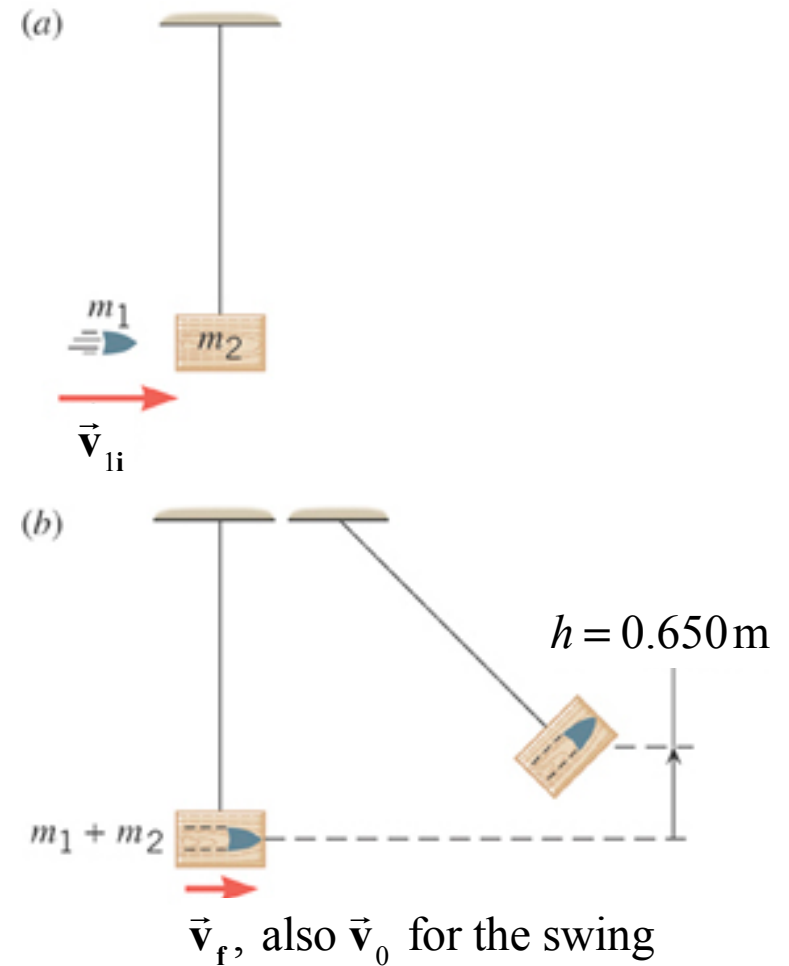
$$\begin{aligned} K + U &= K_0 + U_0 \\ 0 + mgh &= \frac{1}{2}mv_0^2 + 0 \\ v_0 &= \sqrt{2gh} \end{aligned}$$

Apply conservation of momentum in the collision:

$$\begin{aligned} \vec{\mathbf{p}}_{Total,i} &= \vec{\mathbf{p}}_{bullet,i} + \vec{\mathbf{p}}_{block,i} = m_1 v_{1i} + 0 \\ \vec{\mathbf{p}}_{Total,f} &= (m_1 + m_2)v_f \end{aligned}$$

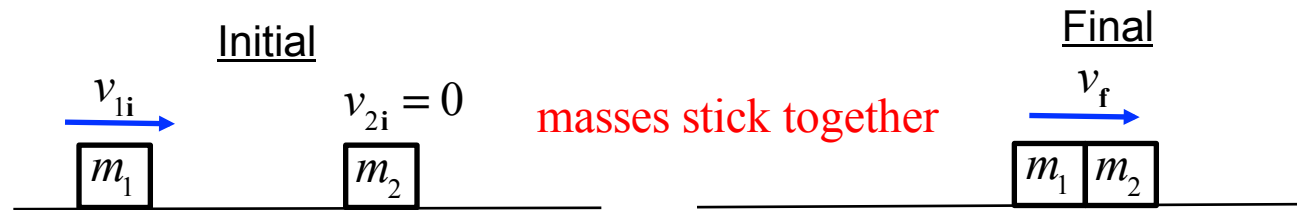
Momentum conservation: $\vec{\mathbf{p}}_{Total,f} = \vec{\mathbf{p}}_{Total,i}$

$$\begin{aligned} v_{1i} &= \frac{(m_1 + m_2)}{m_1} v_f = \frac{(m_1 + m_2)}{m_1} \sqrt{2gh} \\ &= \frac{2.50 + .01}{.01} \sqrt{2(9.81)(0.65)} \text{ m/s} = 896 \text{ m/s} \end{aligned}$$



6.3 Collisions in One Dimension

Inelastic collisions (with only internal forces affecting the motion)



(x – components of the velocities)

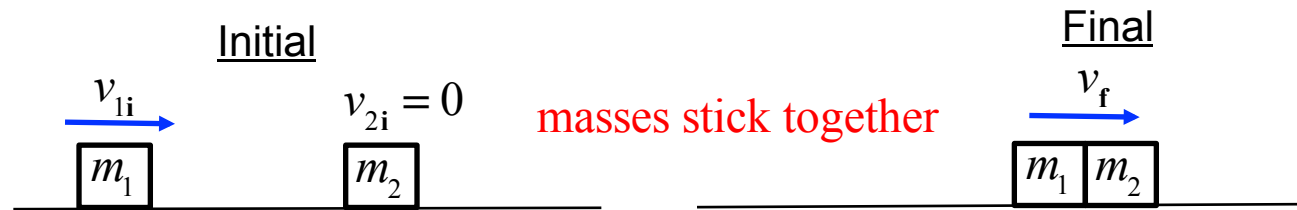
Momentum conservation: $m_1 v_{1i} = (m_1 + m_2) v_f$

Energy **NOT** conserved:

$$v_f = \frac{m_1}{m_1 + m_2} v_{1i}$$

6.3 Collisions in One Dimension

Inelastic collisions (with only internal forces affecting the motion)



(x – components of the velocities)

Momentum conservation: $m_1 v_{1i} = (m_1 + m_2) v_f$

Energy **NOT** conserved:

$$v_f = \frac{m_1}{m_1 + m_2} v_{1i}$$

Masses initially moving
toward each other



(x – components of the velocities)

Momentum conservation: $m_1 v_{1i} + m_2 v_{2i} = (m_1 + m_2) v_f$

Energy **NOT** conserved:

$$v_f = \frac{m_1 v_{1i} + m_2 v_{2i}}{m_1 + m_2}$$

For example: $v_{1i} = +5.0$ m/s, $v_{2i} = -10.0$ m/s, $m_1 = m_2 = m$ (same mass)

$$v_f = \frac{m_1 v_{1i} + m_2 v_{2i}}{m_1 + m_2} = \frac{m}{2m} (v_{1i} + v_{2i}) = 0.5(+5 - 10) \text{ m/s} = -2.5 \text{ m/s}$$

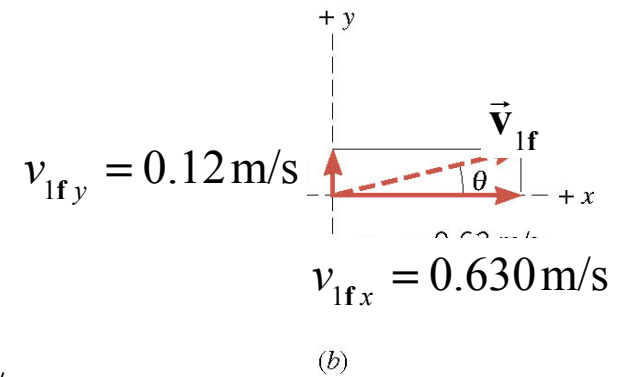
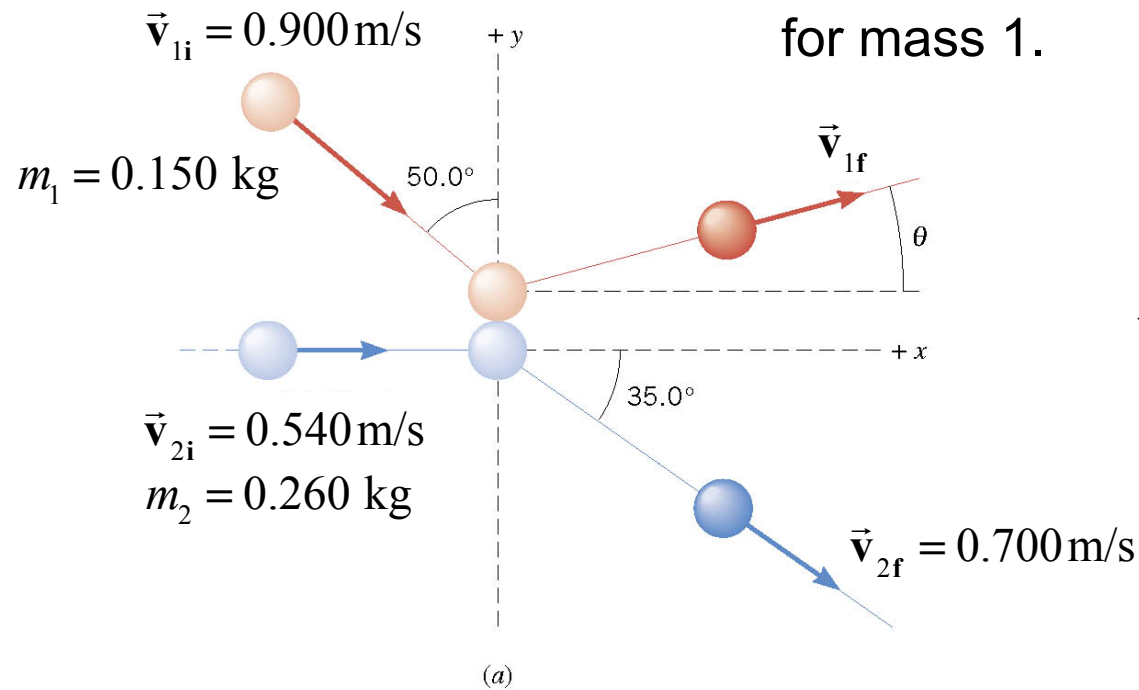
Clicker Question 6.5

A mass with a momentum of $+10.0 \text{ kg} \cdot \text{m} / \text{s}$, collides with a mass twice as big with a momentum of $-6.0 \text{ kg} \cdot \text{m} / \text{s}$, and they stick together. What is the momentum of the combined system after the collision?

- a) $-2.0 \text{ kg} \cdot \text{m} / \text{s}$
- b) $+2.0 \text{ kg} \cdot \text{m} / \text{s}$
- c) $+4.0 \text{ kg} \cdot \text{m} / \text{s}$
- d) $+6.0 \text{ kg} \cdot \text{m} / \text{s}$
- e) $+16.0 \text{ kg} \cdot \text{m} / \text{s}$

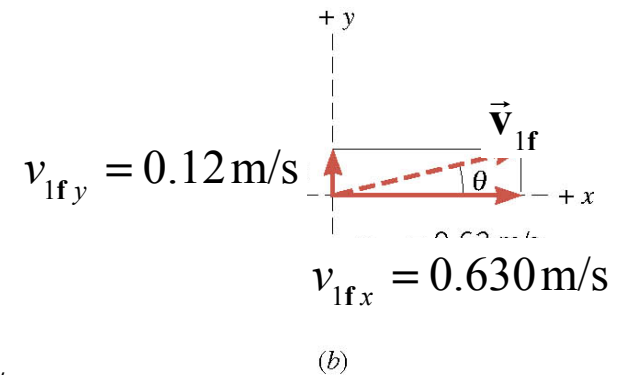
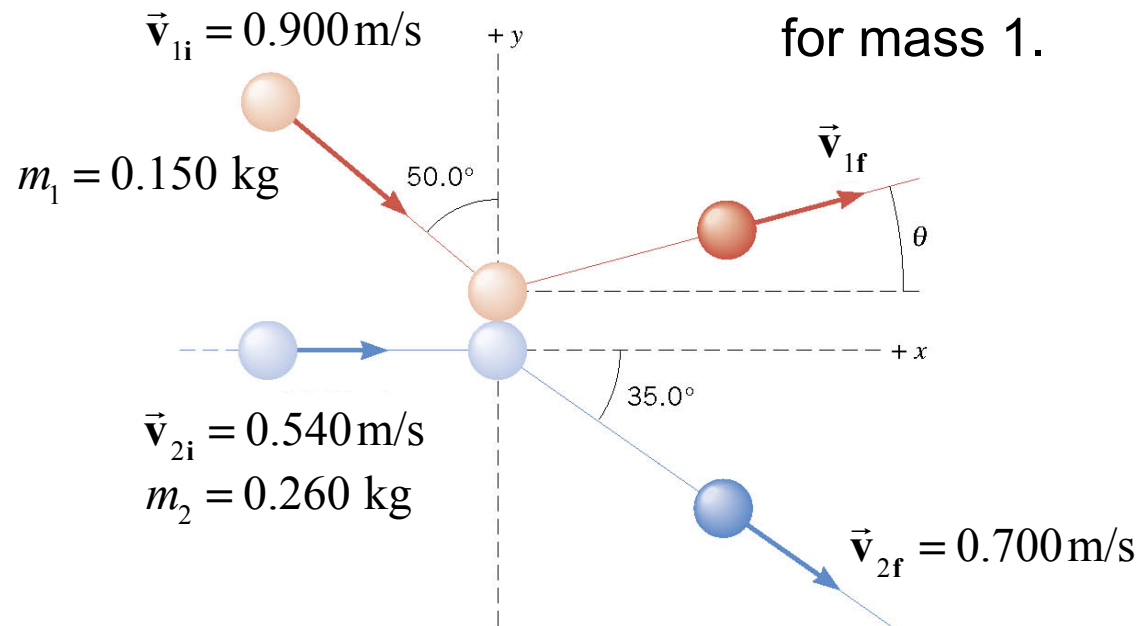
6.4 Collisions in Two Dimensions

Determine the final momentum vector for mass 1.



6.4 Collisions in Two Dimensions

Determine the final momentum vector for mass 1.

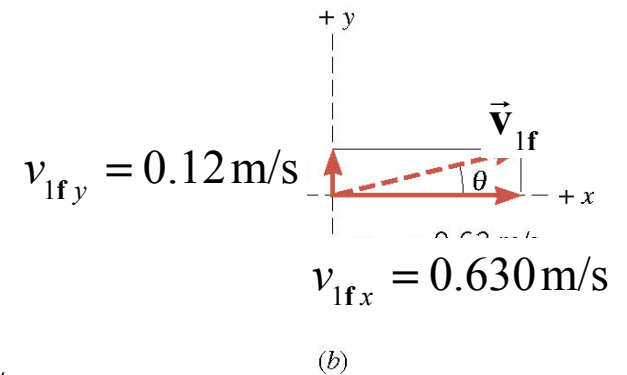
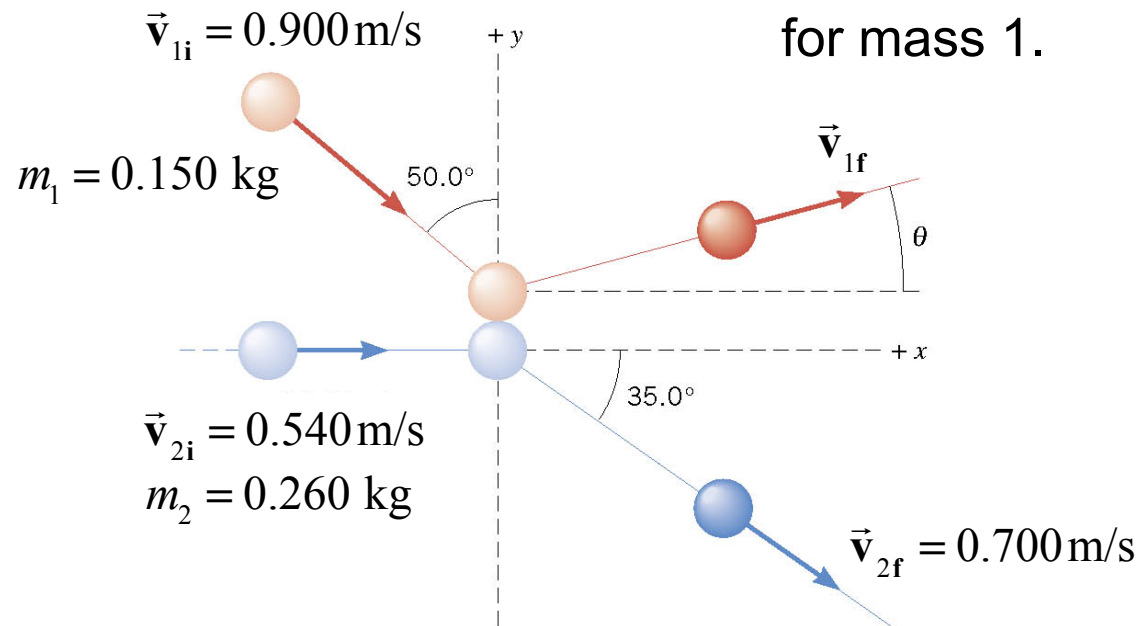


x-components: $m_1 v_{1f} + m_2 v_{2f} = m_1 v_{1i} + m_2 v_{2i}$

$v_{1i} = +0.900 \sin 50^\circ \text{ m/s}$, $v_{2i} = +0.540 \text{ m/s}$, $v_{2f} = +0.700 \cos 35^\circ \text{ m/s}$

6.4 Collisions in Two Dimensions

Determine the final momentum vector for mass 1.



x-components: $m_1 v_{1f} + m_2 v_{2f} = m_1 v_{1i} + m_2 v_{2i}$

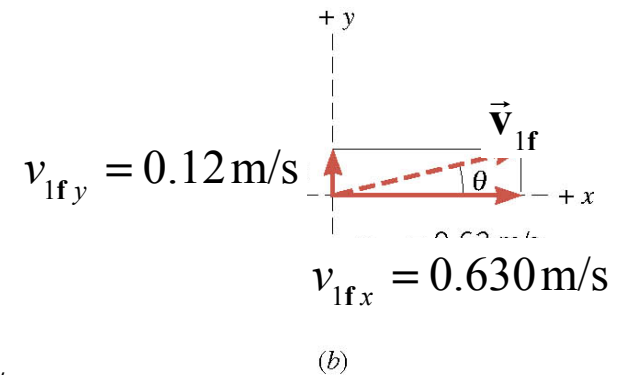
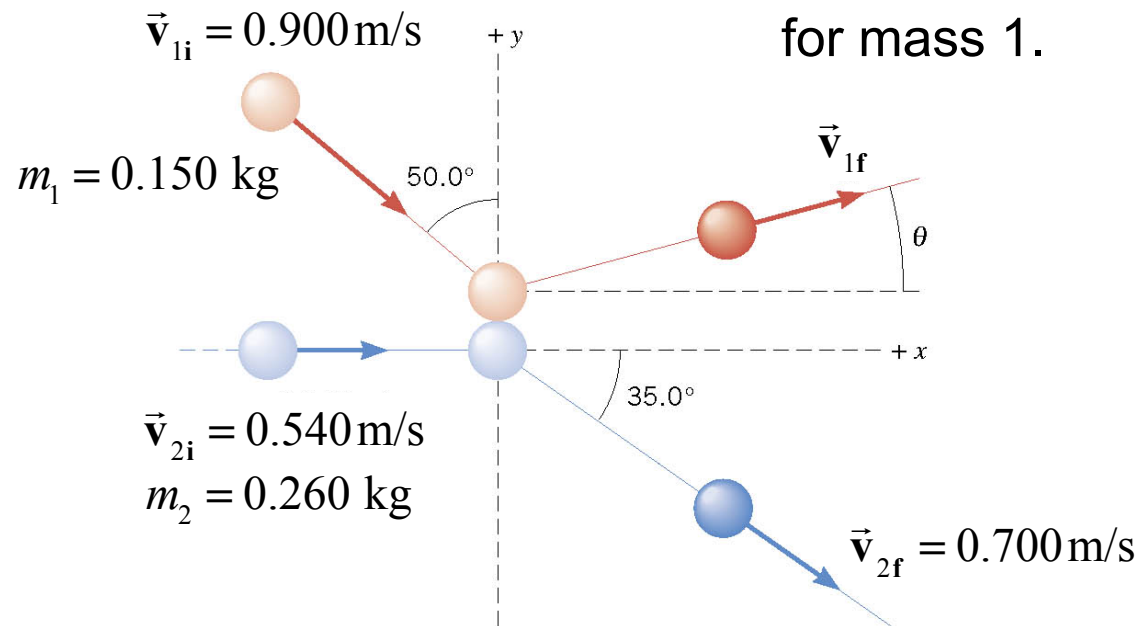
$v_{1i} = +0.900 \sin 50^\circ \text{ m/s}$, $v_{2i} = +0.540 \text{ m/s}$, $v_{2f} = +0.700 \cos 35^\circ \text{ m/s}$

y-components: $m_1 v_{1f} + m_2 v_{2f} = m_1 v_{1i} + m_2 v_{2i}$

$v_{1i} = -0.900 \cos 50^\circ \text{ m/s}$, $v_{2i} = 0$, $v_{2f} = -0.700 \sin 35^\circ \text{ m/s}$

6.4 Collisions in Two Dimensions

Determine the final momentum vector for mass 1.



x-components: $m_1 v_{1f} + m_2 v_{2f} = m_1 v_{1i} + m_2 v_{2i}$

$v_{1i} = +0.900 \sin 50^\circ \text{ m/s}$, $v_{2i} = +0.540 \text{ m/s}$, $v_{2f} = +0.700 \cos 35^\circ \text{ m/s}$

y-components: $m_1 v_{1f} + m_2 v_{2f} = m_1 v_{1i} + m_2 v_{2i}$

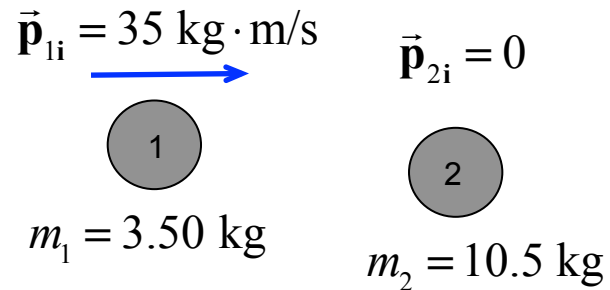
$v_{1i} = -0.900 \cos 50^\circ \text{ m/s}$, $v_{2i} = 0$, $v_{2f} = -0.700 \sin 35^\circ \text{ m/s}$

final x: $v_{1x} = +0.63 \text{ m/s}$ **final y:** $v_{1y} = +0.12 \text{ m/s}$

$v_1 = \sqrt{v_{1x}^2 + v_{1y}^2} = +0.64 \text{ m/s}$; $\theta = \tan^{-1}(v_{1y}/v_{1x}) = 11^\circ$

6.4 Collisions in Two Dimensions

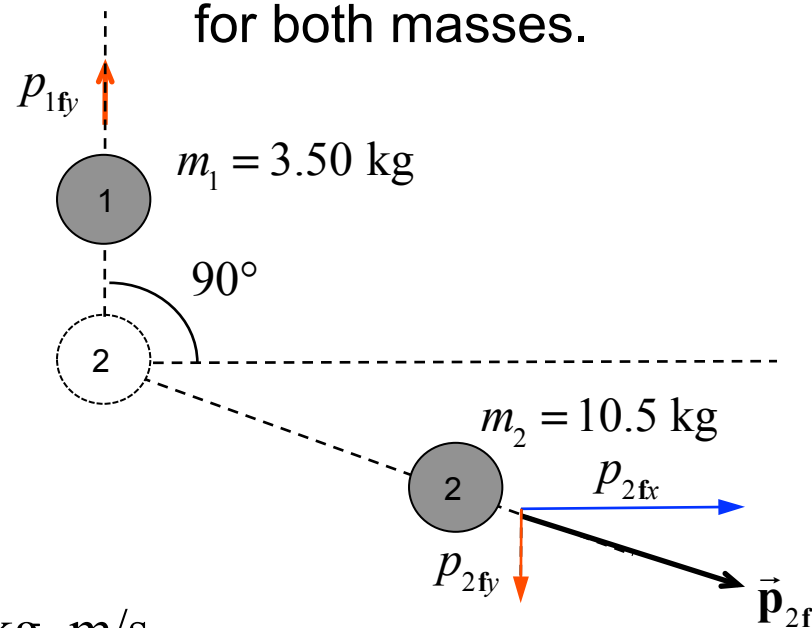
Determine the final momentum vector for both masses.



Momentum conservation

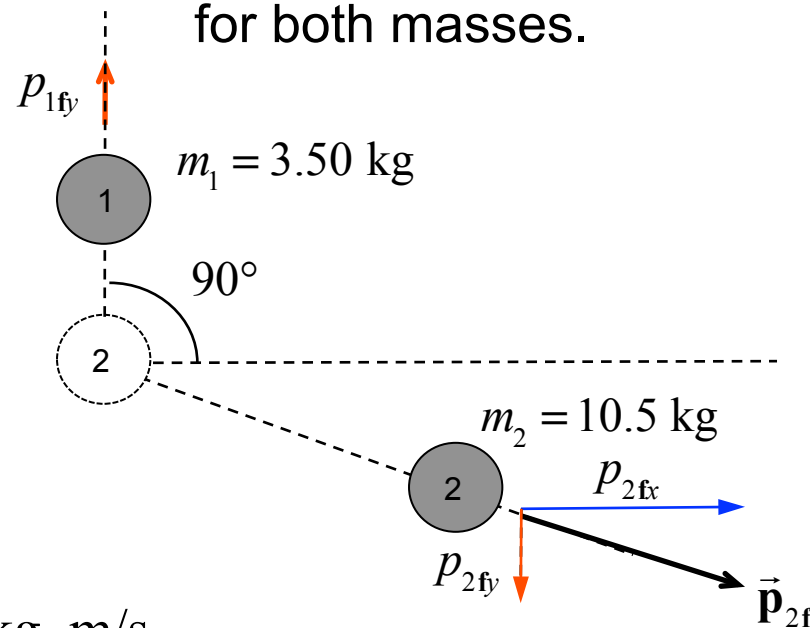
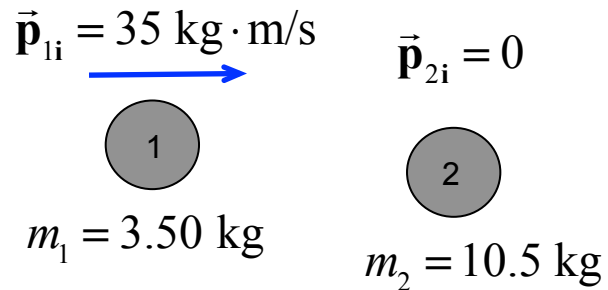
x-components: $p_{1i} = p_{2fx} = 35 \text{ kg} \cdot \text{m/s}$

y-components: $p_{1fy} = -p_{2fy}$



6.4 Collisions in Two Dimensions

Determine the final momentum vector for both masses.



Momentum conservation

x-components: $p_{1i} = p_{2fx} = 35 \text{ kg} \cdot \text{m/s}$

y-components: $p_{1fy} = -p_{2fy}$

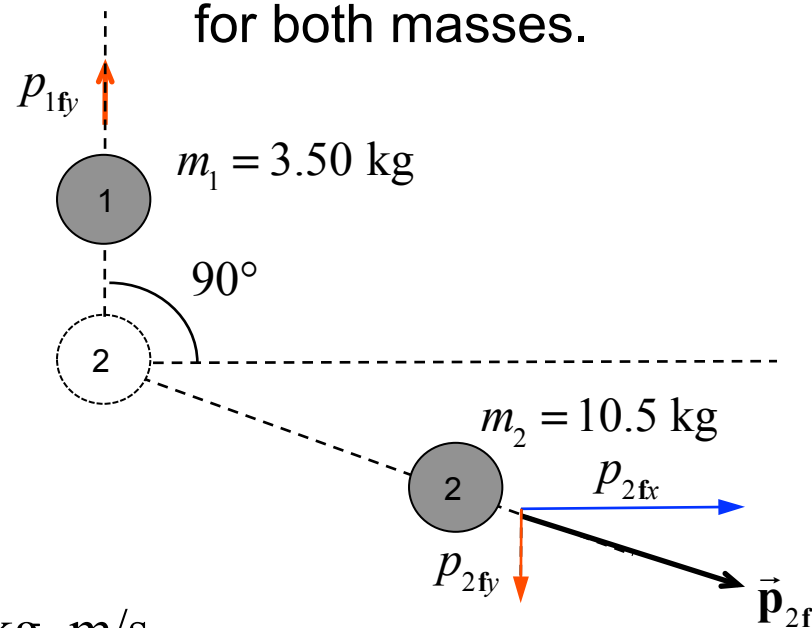
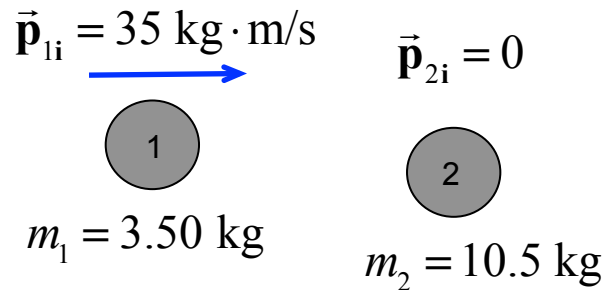
Kinetic Energies

$$K_i = \frac{p_{1i}^2}{2m_1}$$

$$K_f = \frac{p_{1fy}^2}{2m_1} + \frac{p_{2fx}^2 + p_{2fy}^2}{2m_2}$$

6.4 Collisions in Two Dimensions

Determine the final momentum vector for both masses.



Momentum conservation

x-components: $p_{1i} = p_{2fx} = 35 \text{ kg} \cdot \text{m/s}$

y-components: $p_{1fy} = -p_{2fy}$

Kinetic Energies

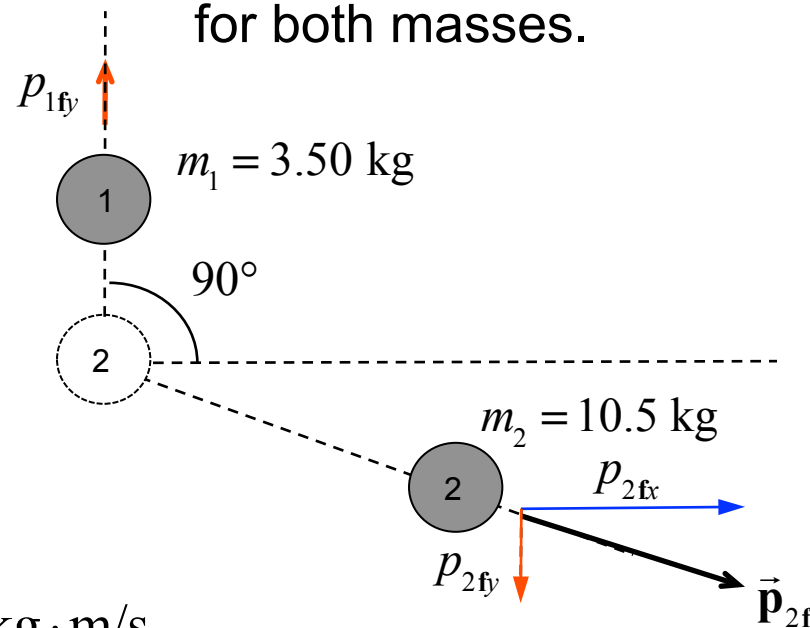
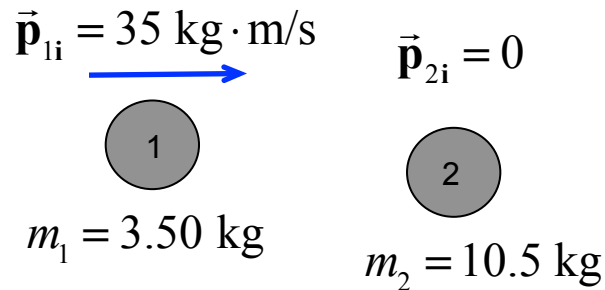
$$K_i = \frac{p_{1i}^2}{2m_1}$$

$$K_f = \frac{p_{1fy}^2}{2m_1} + \frac{p_{2fx}^2 + p_{2fy}^2}{2m_2}$$

$$\frac{p_{2fy}^2}{2m_1} + \frac{p_{1i}^2 + p_{2fy}^2}{2m_2}$$

6.4 Collisions in Two Dimensions

Determine the final momentum vector for both masses.



Momentum conservation

x-components: $p_{1i} = p_{2fx} = 35 \text{ kg} \cdot \text{m/s}$

y-components: $p_{1fy} = -p_{2fy}$

Kinetic Energies

$$K_i = \frac{p_{1i}^2}{2m_1}$$

$$K_f = \frac{p_{1fy}^2}{2m_1} + \frac{p_{2fx}^2 + p_{2fy}^2}{2m_2}$$

$$\frac{p_{2fy}^2}{2m_1} + \frac{p_{1i}^2 + p_{2fy}^2}{2m_2}$$

Energy conservation

$$K_f = K_i$$

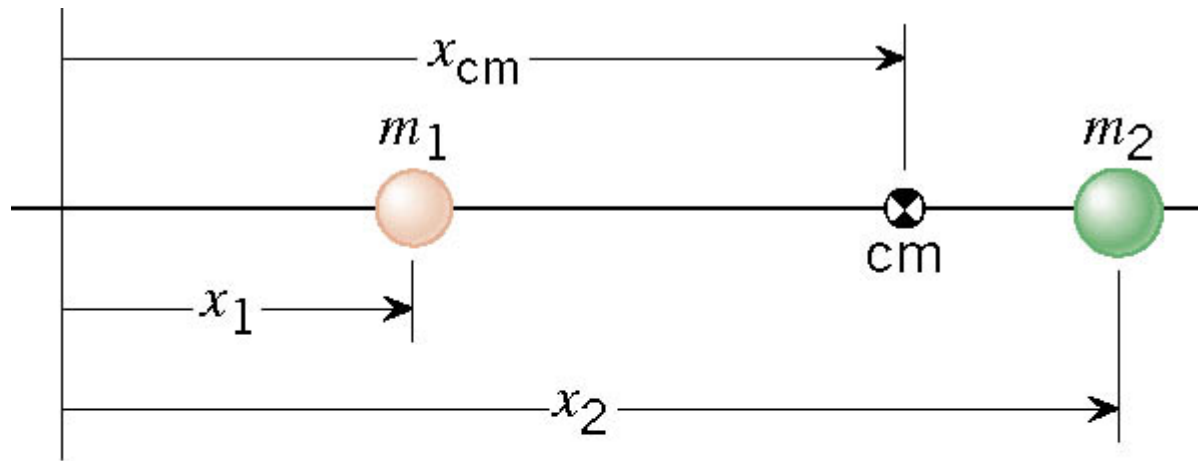
$$p_{2fy}^2 \left(\frac{1}{m_1} + \frac{1}{m_2} \right) = p_{1i}^2 \left(\frac{1}{m_1} - \frac{1}{m_2} \right)$$

$$p_{2fy} = \pm \frac{1}{\sqrt{2}} p_{1i} \Rightarrow p_{2fy} = -24.7 \text{ kg} \cdot \text{m/s}$$

$$p_{1fy} = 24.7 \text{ kg} \cdot \text{m/s}$$

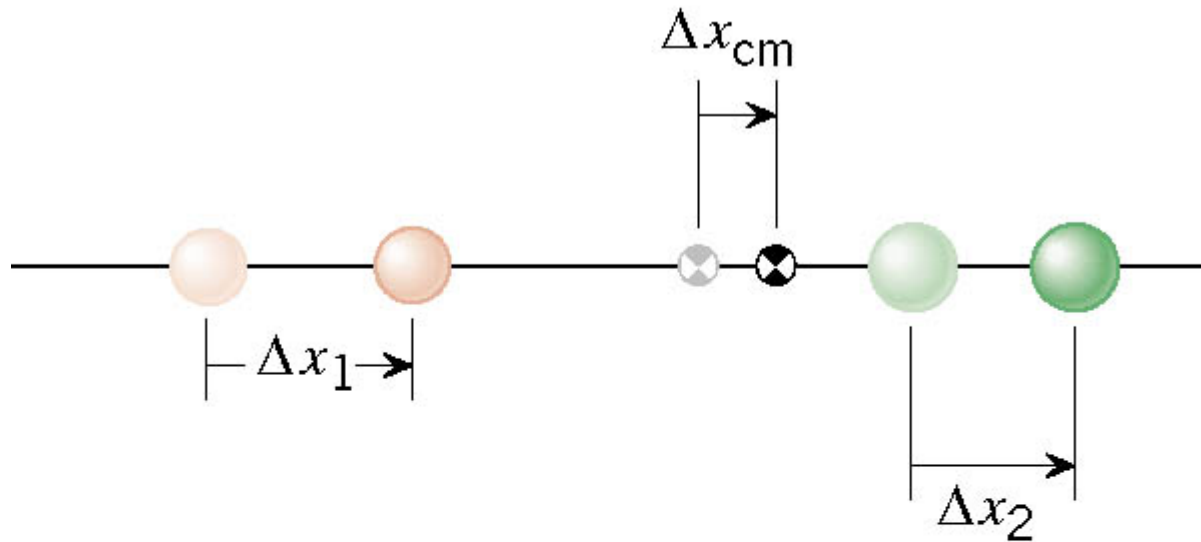
6.5 Center of Mass

The center of mass is a point that represents the average location for the total mass of a system.



$$x_{cm} = \frac{m_1 x_1 + m_2 x_2}{m_1 + m_2}$$

6.5 Center of Mass



$$\Delta x_{cm} = \frac{m_1 \Delta x_1 + m_2 \Delta x_2}{m_1 + m_2} \quad \Rightarrow \quad v_{cm} = \frac{m_1 v_1 + m_2 v_2}{m_1 + m_2}$$

6.5 Center of Mass


$$v_{cm} = \frac{m_1 v_1 + m_2 v_2}{m_1 + m_2}$$

In an isolated system, the total linear momentum does not change, therefore the velocity of the center of mass does not change.

6.5 Center of Mass

BEFORE

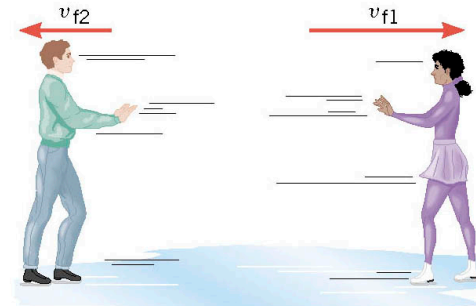
$$v_{cm} = \frac{m_1 v_1 + m_2 v_2}{m_1 + m_2} = 0$$



(a) Before

AFTER

$$v_{cm} = \frac{m_1 v_1 + m_2 v_2}{m_1 + m_2}$$



(b) After

$$= \frac{(88 \text{ kg})(-1.5 \text{ m/s}) + (54 \text{ kg})(+2.5 \text{ m/s})}{88 \text{ kg} + 54 \text{ kg}}$$

$$= 0.00$$