

# *Chapter 9*

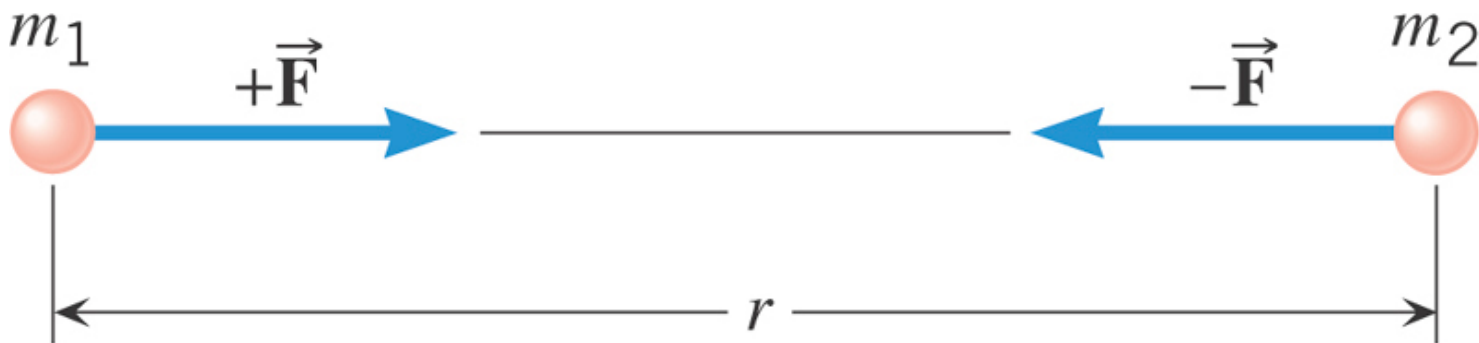
## ***Gravitation***

## 9.1 The Gravitational Force

For two particles that have masses  $m_1$  and  $m_2$  and are separated by a distance  $r$ , the force has a magnitude given by

$$F = G \frac{m_1 m_2}{r^2}$$

$$G = 6.673 \times 10^{-11} \text{ N} \cdot \text{m}^2 / \text{kg}^2$$



the same magnitude of force acts on each mass, no matter what the values of the masses.

## 9.1 The Gravitational Force

### Near the earth's surface

$$F = G \frac{m_1 m_2}{r^2}$$

Radius of the earth

$$r = R_E = 6.38 \times 10^6 \text{ m}$$

Gravitational force on mass  $m$  at the Earth's surface

$$F = mg \quad \& \quad F = \frac{GmM_E}{R_E^2} \quad \Rightarrow \quad mg = \frac{GmM_E}{R_E^2}$$

$$g = G \frac{M_E}{R_E^2} = \left( 6.67 \times 10^{-11} \text{ N} \cdot \text{m}^2 / \text{kg}^2 \right) \frac{(5.97 \times 10^{24} \text{ kg})}{(6.37 \times 10^6 \text{ m})^2}$$

$$= 9.81 \text{ m/s}^2 \quad \text{This is why acceleration due to gravity is this value on the earth.}$$

And why your WEIGHT on the earth

$$W = mg$$

for example:  $m = 80.0 \text{ kg}$ ,


$$W = mg = 784 \text{ N}$$

## 9.1 The Gravitational Force

### Above the earth's surface

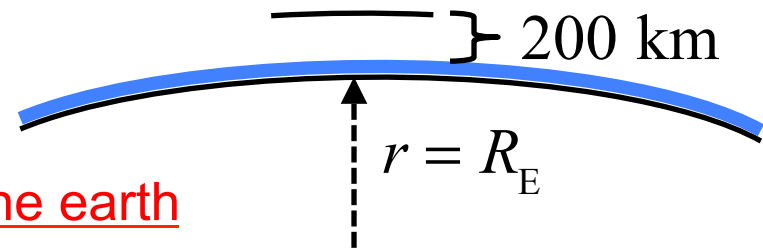
In orbit at altitude = 250 km

$$g = 9.81 \text{ m/s}^2$$



$$g' = 9.09 \text{ m/s}^2$$

At radius of the earth



At 250 km above the earth

$$\begin{aligned} r' &= R_E + 250 \text{ km} = \underline{6.37 \times 10^6} + 0.25 \times 10^6 \text{ m} \\ &= \underline{6.62 \times 10^6 \text{ m}} \end{aligned}$$

$$g' = \frac{GM_E}{r'^2} = 9.09 \text{ m/s}^2$$

In low-earth orbit,  
your weight is 7.3% less than on earth. NOT ZERO!

## Clicker Question 9.1

**A person weighs 500 N on the earth. Consider this person on planet P where the acceleration due to gravity is,  $g_p = 4.9 \text{ m/s}^2$ .**

**Chose the answer that is *false* (or answer e).**

- a) On the earth, the mass of the person is 51 kg.
- b) Everywhere on the earth, the person has a mass of 51 kg.
- c) On the planet P, the mass of the person is 51 kg.
- d) On the planet P, the weight of the person is 250 N.
- e) All of the above are true.

## Clicker Question 9.1

A person weighs 500 N on the earth. Consider this person on planet P where the acceleration due to gravity is,  $g_p = 4.9 \text{ m/s}^2$ .

Chose the answer that is *false* (or answer e).

a) On the earth, the mass of the person is 51 kg.  $m = W/g = 51 \text{ kg}$

b) Everywhere on the earth, the person has a mass of 51 kg. True

c) On the planet P, the mass of the person is 51 kg. True

d) On the planet P, the weight of the person is 250 N.  $W = mg_p = 250 \text{ N}$

e) All of the above are true.

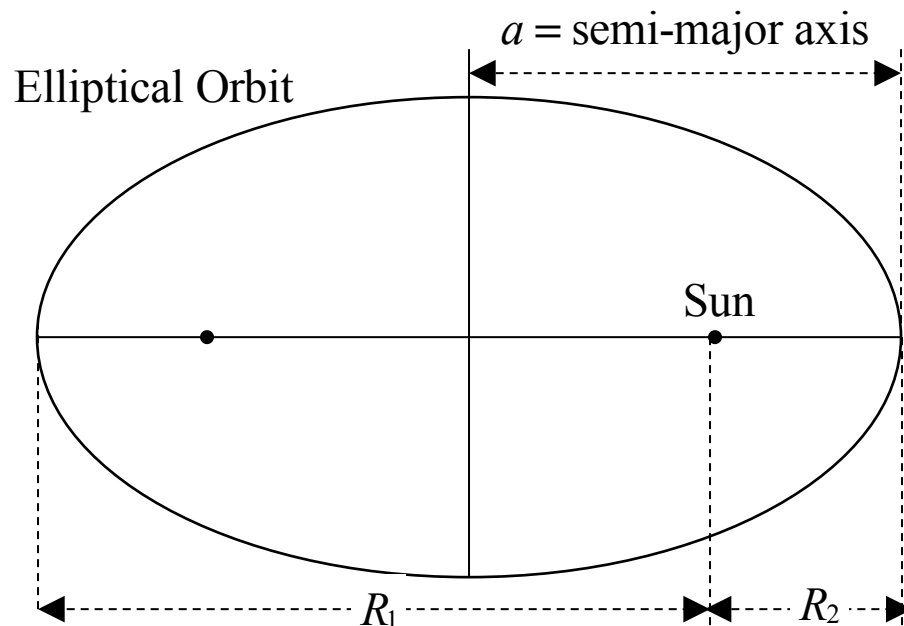
## 9.2 *Elliptical Orbits*

In general, the orbit of a satellite (around a planet) or planet (around a star) is an ellipse. Kepler was the first to describe this motion for planets around the sun that are a consequence of Newton's Universal Gravitational Force.

### ***Kepler's Laws for planetary orbits (in homework)***

1. Orbits are elliptical with the Sun at one focus.
2. In a given time a planet covers the same area anywhere in the orbit.
3. If  $T$  is the orbital period and  $a$  the semi-major axis of the orbit, then

$$\frac{a^3}{T^2} = C \text{ (constant)} \quad C_{\text{Sun}} = 3.36 \times 10^{18} \text{ m}^3/\text{s}^2$$



(for circular orbit,  $a = \text{radius}$ )

$$\left[ \begin{array}{l} \text{For an elliptical orbit, } a = \frac{R_1 + R_2}{2}, \\ \text{where } R_1 = \text{aphelion, } R_2 = \text{perihelion} \end{array} \right]$$

### 9.3 *Gravitational Potential Energy*

The Gravitational force gets smaller for large distances above the earth.

Gravitational Potential Energy for large distances above the earth requires that the Potential Energy be defined as zero at very large distances. The closer one gets to the earth the lower (or the more negative) the potential energy becomes.

Near the surface of the earth we use:

$$U = mgy \quad (\text{puts } U = 0 \text{ at } y = 0)$$

But for extreme heights above the earth use:

$$U = -G \frac{mM_E}{r} \quad (\text{puts } U = 0 \text{ at } r = \infty)$$

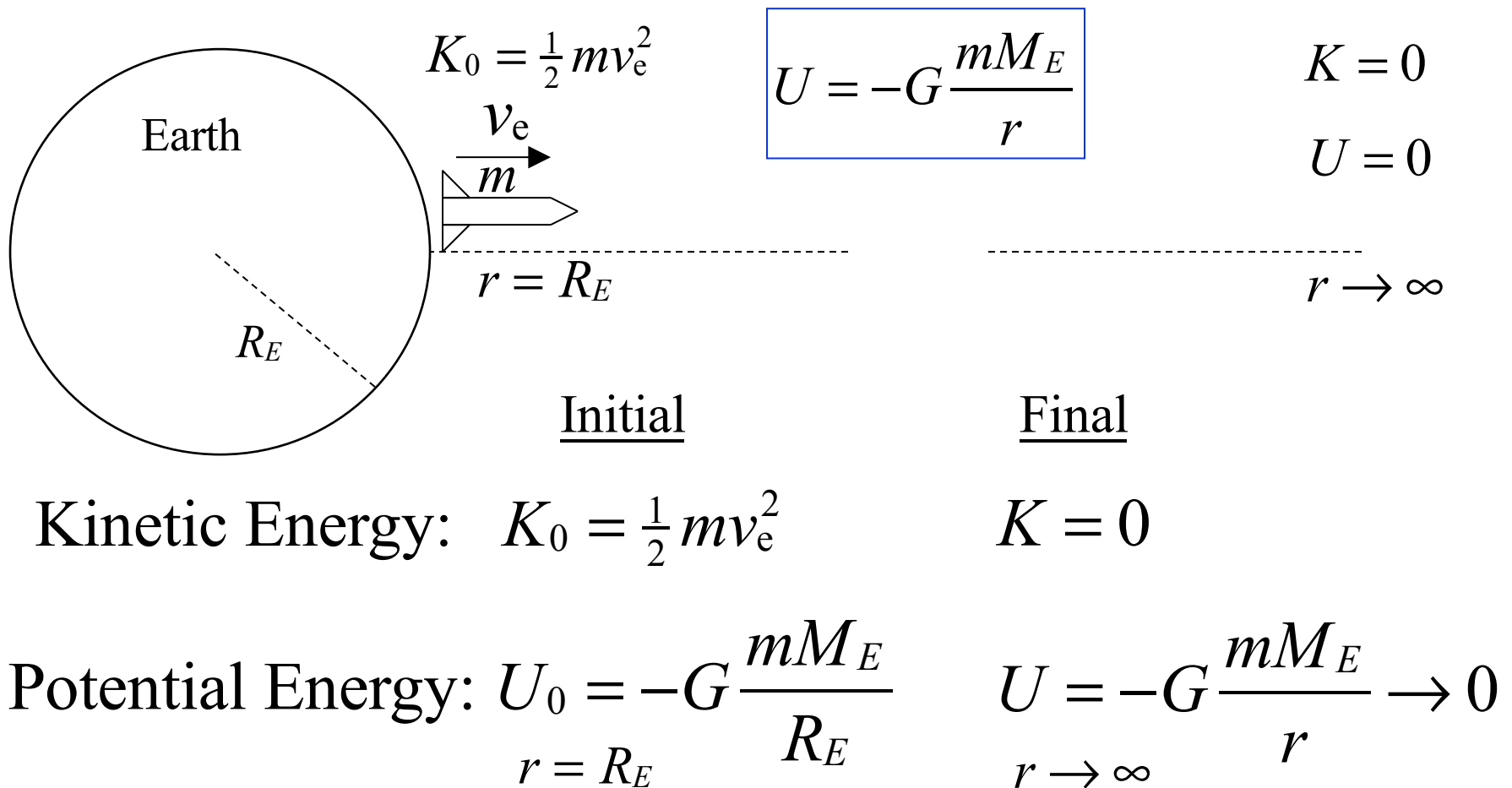
Only need changes in Potential Energy affect motion.



### 9.3 Gravitational Potential Energy

#### **Example: Escape velocity (Energy Conservation)**

There is a velocity above which an object fired from the surface of the earth will never return to the earth. A rocket fires just long enough to get above the atmosphere and reach the escape speed.



### 9.3 Gravitational Potential Energy

#### **Example: Escape velocity (Energy Conservation)**

$$K_0 + U_0 = K + U = 0 \quad (K = 0, \quad U = 0)$$

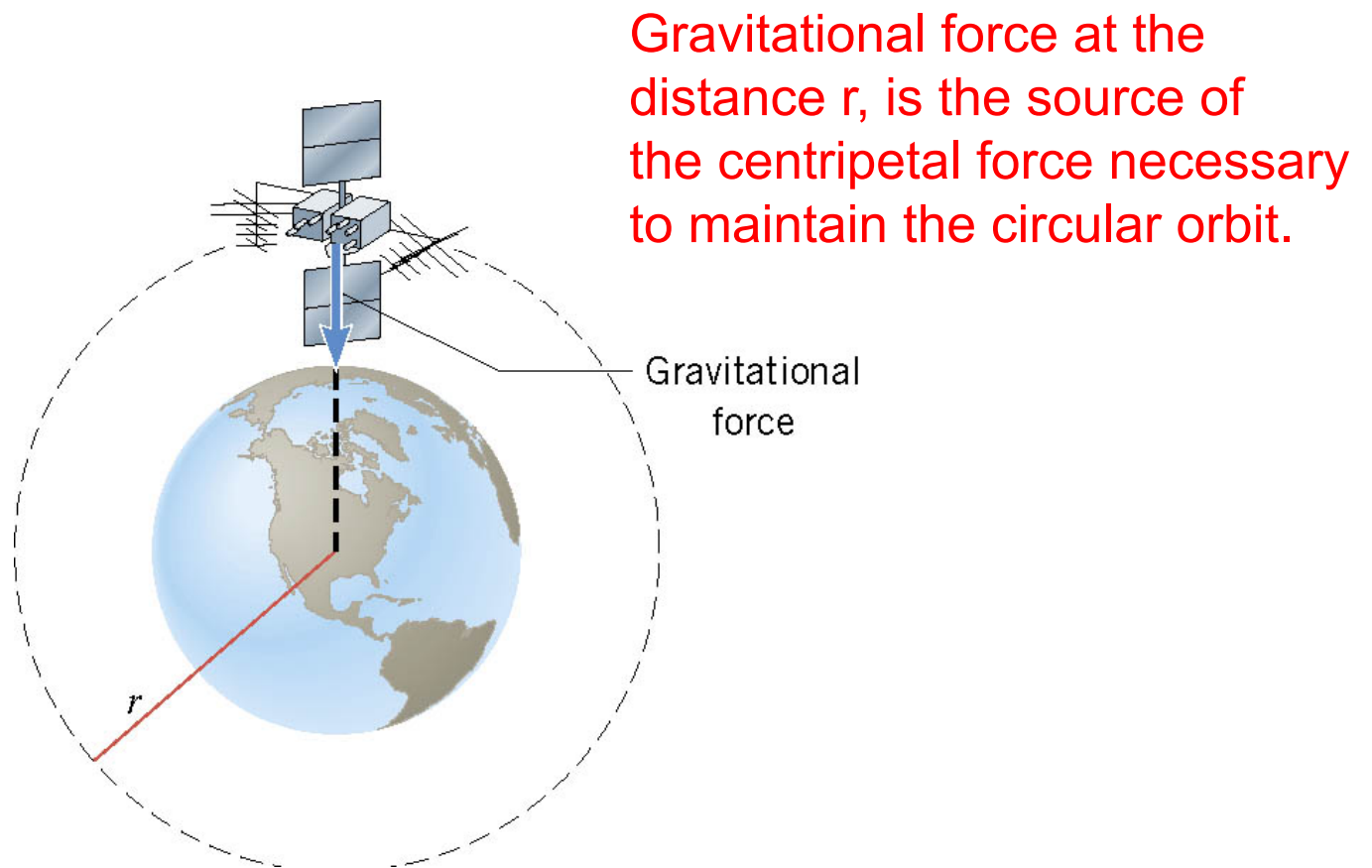
$$\frac{1}{2} m v_e^2 + \left[ -G \frac{m M_E}{R_E} \right] = 0$$

$$v_e^2 = 2G \frac{M_E}{R_E} \quad \text{earlier: } g = G \frac{M_E}{R_E^2}$$

$$\begin{aligned} v_e &= \sqrt{2gR_E} = \sqrt{2(9.81 \text{ m/s}^2)(6.37 \times 10^6 \text{ m})} = \\ &= 11.2 \text{ km/s} = 40.3 \times 10^3 \text{ km/hr} \quad (\sim 25,000 \text{ miles/hr}) \end{aligned}$$

## 9.4 Satellites in Circular Orbits

There is only one speed that a satellite can have if the satellite is to remain in an orbit with a fixed radius.

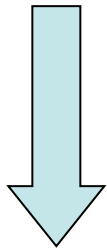


## 9.4 Satellites in Circular Orbits

Gravitational force  
at the distance  $r$

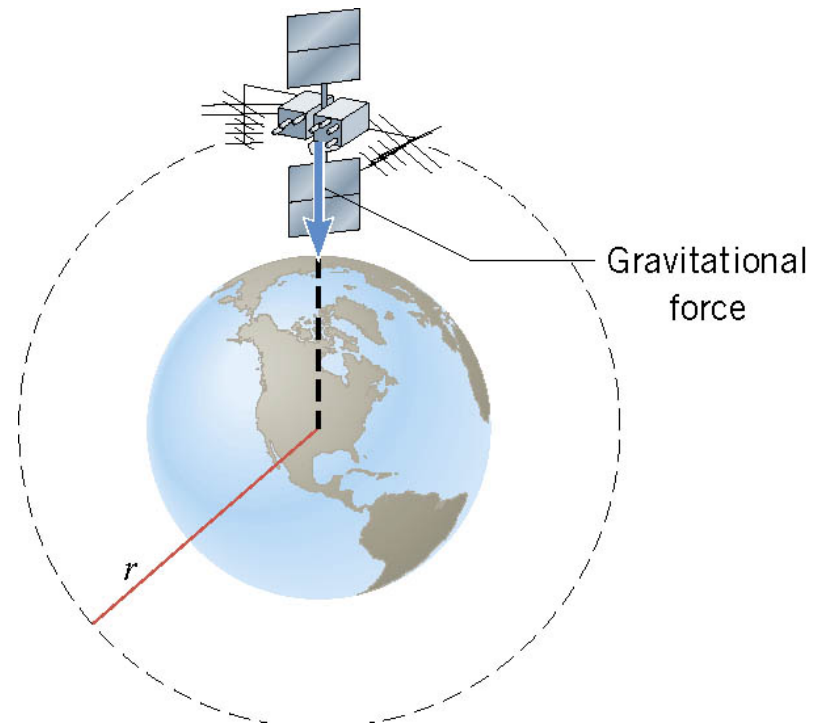
Centripetal force

$$F_C = G \frac{mM_E}{r^2} = m \frac{v^2}{r} \quad (ma_C)$$



$$v = \sqrt{\frac{GM_E}{r}}$$

Speed to keep satellite in the orbit with radius  $r$ .



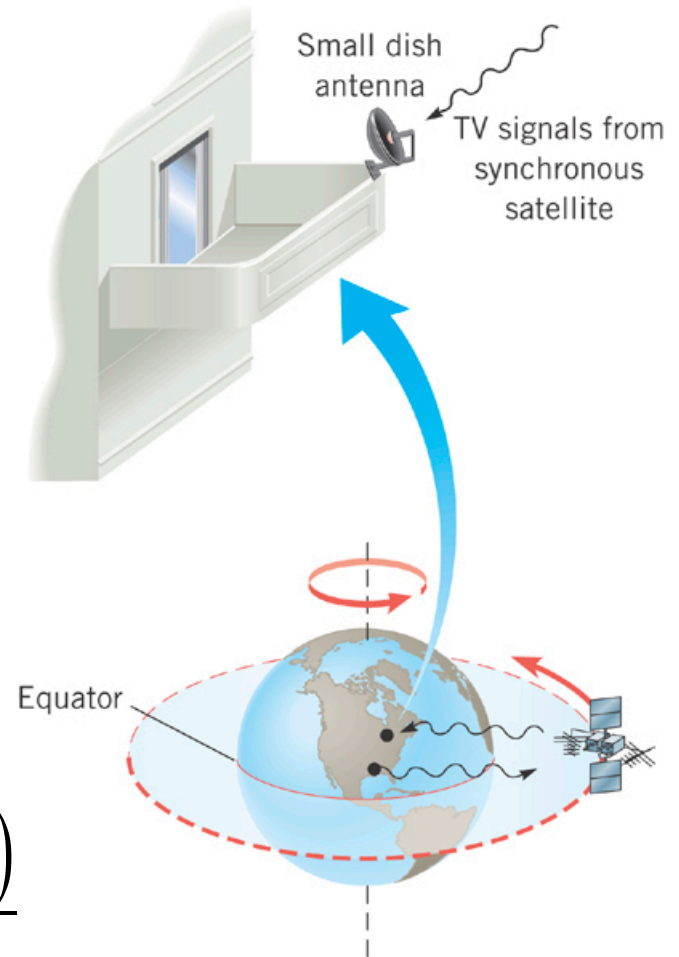
## 9.4 Satellites in Circular Orbits

There is a radius where the speed will make the satellite go around the earth in exactly 24 hours. This keeps the satellite at a fixed point in the sky.

$$\omega = \frac{2\pi}{(3600 \text{ s/hr})(24 \text{ hr})} \quad \text{same for Earth \& satellite}$$
$$= 72.7 \times 10^{-6} \text{ rad/s}$$

$$\omega r_s = v_T = \sqrt{\frac{GM_E}{r_s}}$$
$$r_s^3 = \frac{GM_E}{\omega^2}$$
$$= \frac{(6.67 \times 10^{-11} \text{ Nm}^2/\text{kg}^2)(5.97 \times 10^{24} \text{ kg})}{(72.7 \times 10^{-6} \text{ rad/s})^2}$$

$$r_s = 42,200 \text{ km (synchronous orbit)}$$



## 9.5 *Apparent Weightlessness*

Can you feel gravity? This has been discussed previously:

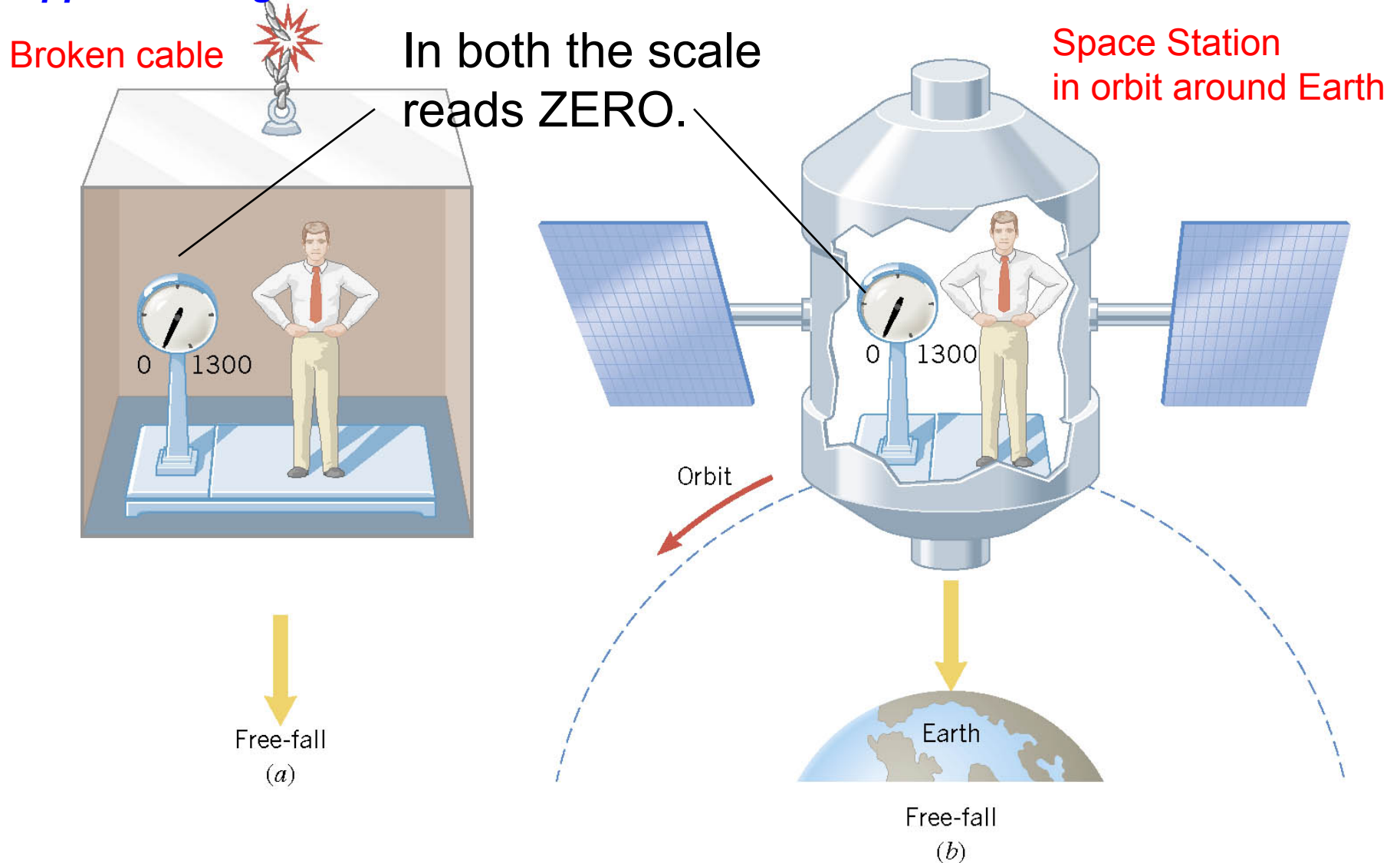
- 1) Hanging from a 100 m high diving board  
– your arms feel stretched by the upward force of bent board.
- 2) Standing on a bed – your legs feel compressed by the compressed springs in the mattress.

The bent diving board or the compressed springs provide the force to balance the gravitational force on your whole body.

When you let go of the diving board and before you hit the ground the ONLY force on you is gravity. It makes you accelerate downward, but it does not stretch or compress your body.

In free fall one cannot feel the force of gravity!

## 9.5 Apparent Weightlessness



But it is the Gravitational Force (definition of weight) that makes both the elevator and the body free-fall with the same acceleration. **FEELING** weightless and **BEING** weightless are **VERY** different.

# *Chapter 8*

## *continued*

# ***Rotational Dynamics***



### 8.3 Angular Variables and Tangential Variables (REVIEW)

$\omega$  = angular velocity - **same at all radii** (radians/s)

$\alpha$  = angular acceleration - **same at all radii** (radians/s<sup>2</sup>)

$\vec{v}_T$  = tangential velocity - **different at each radius**

$\vec{a}_T$  = tangential acceleration - **different at each radius**

Direction is tangent to circle at that  $\theta$

$$\vec{v}_T = \omega r$$

$$\vec{a}_T = \alpha r$$

$$\vec{v}_T \text{ (m/s)}$$

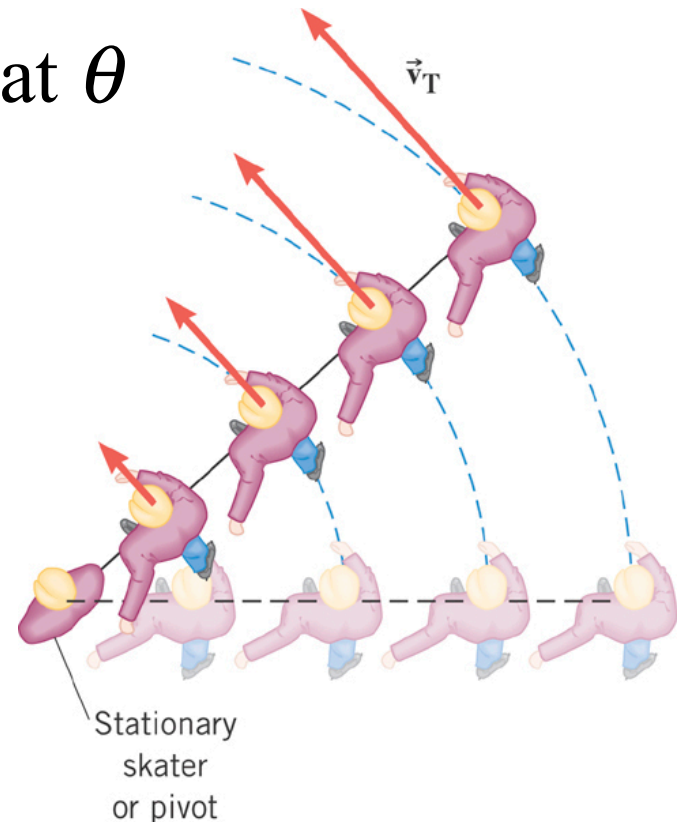
$$\vec{a}_T \text{ (m/s}^2\text{)}$$

$$\omega \text{ (rad/s)}$$

$$\alpha \text{ (rad/s}^2\text{)}$$

$$r \text{ (m)}$$

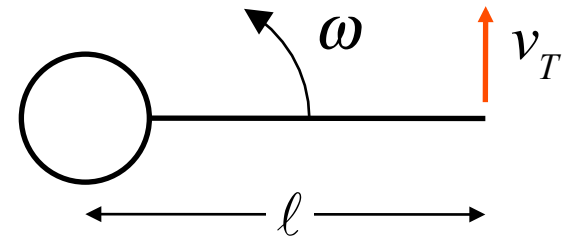
$$r \text{ (m)}$$



### Clicker Question 8.3

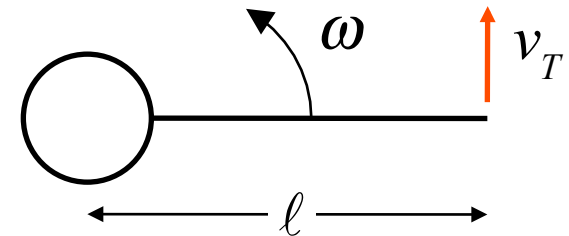
A weed wacker is a length of nylon string that rotates rapidly around one end. The rotation angular speed is  $47.0 \text{ rev/s}$ , and the tip has tangential speed of  $54.0 \text{ m/s}$ . What is length of the nylon string?

- a)  $0.030 \text{ m}$
- b)  $0.120 \text{ m}$
- c)  $0.180 \text{ m}$
- d)  $0.250 \text{ m}$
- e)  $0.350 \text{ m}$



### Clicker Question 8.3

A weed wacker is a length of nylon string that rotates rapidly around one end. The rotation angular speed is 47.0 rev/s, and the tip has tangential speed of 54.0 m/s. What is length of the nylon string?



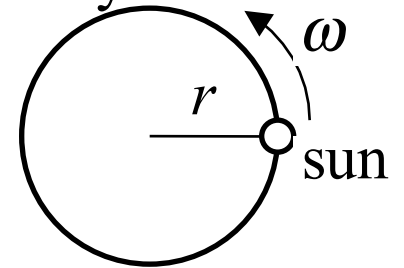
- a) 0.033 m
- b) 0.123 m
- c) 0.183 m**
- d) 0.253 m
- e) 0.353 m

$$v_T = \omega r$$
$$= \omega \ell$$

$$\ell = \frac{v_T}{\omega}; \quad \omega = 47.0 \text{ rev/s} = 2\pi(47.0) \text{ rad/s} = 295 \text{ rad/s}$$
$$= \frac{54.0 \text{ m/s}}{295 \text{ rad/s}} = 0.183 \text{ m}$$

### Clicker Question 8.4

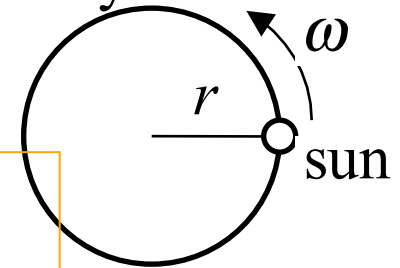
The sun moves in circular orbit with a radius of  $2.30 \times 10^4$  light-yrs, ( $1 \text{ light-yr} = 9.50 \times 10^{15} \text{ m}$ ) around the center of the galaxy at an angular speed of  $1.10 \times 10^{-15} \text{ rad/s}$ . Find the tangential speed of sun.



- a)  $2.40 \times 10^5 \text{ m/s}$
- b)  $3.40 \times 10^5 \text{ m/s}$
- c)  $4.40 \times 10^5 \text{ m/s}$
- d)  $5.40 \times 10^5 \text{ m/s}$
- e)  $6.40 \times 10^5 \text{ m/s}$

### Clicker Question 8.4

The sun moves in circular orbit with a radius of  $2.30 \times 10^4$  light-yrs, ( $1 \text{ light-yr} = 9.50 \times 10^{15} \text{ m}$ ) around the center of the galaxy at an angular speed of  $1.10 \times 10^{-15} \text{ rad/s}$ . Find the tangential speed of sun.



**a)**  $2.40 \times 10^5 \text{ m/s}$

**b)**  $3.40 \times 10^5 \text{ m/s}$

**c)**  $4.40 \times 10^5 \text{ m/s}$

**d)**  $5.40 \times 10^5 \text{ m/s}$

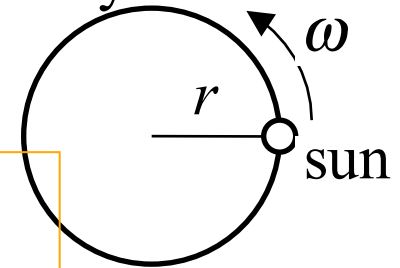
**e)**  $6.40 \times 10^5 \text{ m/s}$

$$r = (2.30 \times 10^4 \text{ l-yr})(9.50 \times 10^{15} \text{ m/l-yr})$$
$$= 2.19 \times 10^{20} \text{ m}$$

$$v_T = \omega r = (1.10 \times 10^{-15} \text{ rad/s})(2.19 \times 10^{20} \text{ m})$$
$$= 2.40 \times 10^5 \text{ m/s}$$

### Clicker Question 8.4

The sun moves in circular orbit with a radius of  $2.30 \times 10^4$  light-yrs, ( $1 \text{ light-yr} = 9.50 \times 10^{15} \text{ m}$ ) around the center of the galaxy at an angular speed of  $1.10 \times 10^{-15} \text{ rad/s}$ . Find the tangential speed of sun.



a)  $2.40 \times 10^5 \text{ m/s}$

b)  $3.40 \times 10^5 \text{ m/s}$

c)  $4.40 \times 10^5 \text{ m/s}$

d)  $5.40 \times 10^5 \text{ m/s}$

e)  $6.40 \times 10^5 \text{ m/s}$

$$r = (2.30 \times 10^4 \text{ l-yr})(9.50 \times 10^{15} \text{ m/l-yr})$$
$$= 2.19 \times 10^{20} \text{ m}$$

$$v_T = \omega r = (1.10 \times 10^{-15} \text{ rad/s})(2.19 \times 10^{20} \text{ m})$$
$$= 2.40 \times 10^5 \text{ m/s}$$

Clicker Question 8.5 Find the centripetal force on the sun.

$$m_{\text{Sun}} = (1.99 \times 10^{30} \text{ kg})$$

a)  $2.27 \times 10^{20} \text{ N}$

b)  $3.27 \times 10^{20} \text{ N}$

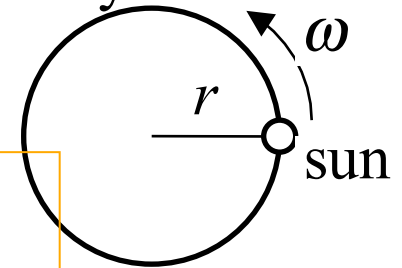
c)  $4.27 \times 10^{20} \text{ N}$

d)  $5.27 \times 10^{20} \text{ N}$

e)  $6.27 \times 10^{20} \text{ N}$

### Clicker Question 8.4

The sun moves in circular orbit with a radius of  $2.30 \times 10^4$  light-yrs, ( $1 \text{ light-yr} = 9.50 \times 10^{15} \text{ m}$ ) around the center of the galaxy at an angular speed of  $1.10 \times 10^{-15} \text{ rad/s}$ . Find the tangential speed of sun.



a)  $2.40 \times 10^5 \text{ m/s}$

b)  $3.40 \times 10^5 \text{ m/s}$

c)  $4.40 \times 10^5 \text{ m/s}$

d)  $5.40 \times 10^5 \text{ m/s}$

e)  $6.40 \times 10^5 \text{ m/s}$

$$r = (2.30 \times 10^4 \text{ l-yr})(9.50 \times 10^{15} \text{ m/l-yr})$$
$$= 2.19 \times 10^{20} \text{ m}$$

$$v_T = \omega r = (1.10 \times 10^{-15} \text{ rad/s})(2.19 \times 10^{20} \text{ m})$$
$$= 2.40 \times 10^5 \text{ m/s}$$

### Clicker Question 8.5 Find the centripetal force on the sun

a)  $2.27 \times 10^{20} \text{ N}$

b)  $3.27 \times 10^{20} \text{ N}$

c)  $4.27 \times 10^{20} \text{ N}$

d)  $5.27 \times 10^{20} \text{ N}$

e)  $6.27 \times 10^{20} \text{ N}$

$$m_{\text{Sun}} = (1.99 \times 10^{30} \text{ kg})$$

$$F_C = ma_C = m(\omega^2 r)$$

$$= (1.99 \times 10^{30} \text{ kg})(1.10 \times 10^{-15} \text{ /s})^2 (2.19 \times 10^{20} \text{ m})$$
$$= 5.27 \times 10^{20} \text{ N}$$