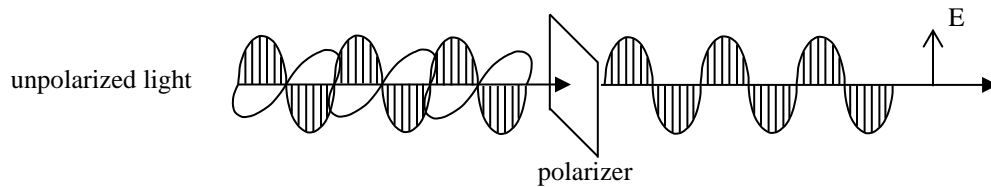


Within this lab you will explore effects of optical polarization. The exercises are divided into three parts A-C, all of which employ polarizing sheets. You will have some freedom in deciding how to progress within each set of exercises. Much of the data acquisition will be done visually, but some will require measuring light intensity with a power meter. Especially in the absence of numbers you should take detailed notes to be able to faithfully describe what was going on. Your report should explain how each part of the exercises was executed independently of the other two parts.



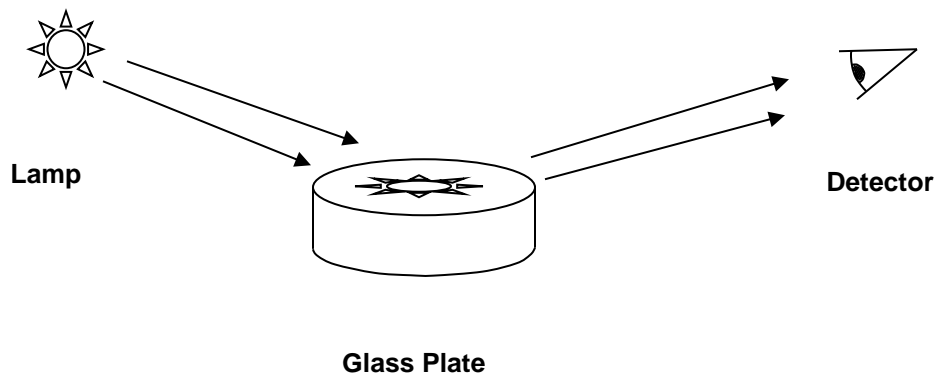
Procedure:

A. Use a lamp as an unpolarized source to determine if light reflected at grazing incidence from a glass plate gets polarized (see the figure below for clarification).

Q1. If polarization is present, what is its direction? Can you explain any origin of the polarization? Is there a dependence on the angle of incidence?

Q2. Instead of a glass plate, consider now a road in the late afternoon sun. What orientation should your polarized sunglasses have to eliminate blinding by light reflected off the road?

Q3. Can you use the polarization in reflection to ‘calibrate’ your polarizing sheets (i.e. establish the orientation of the polarization that is transmitted by the sheets)?

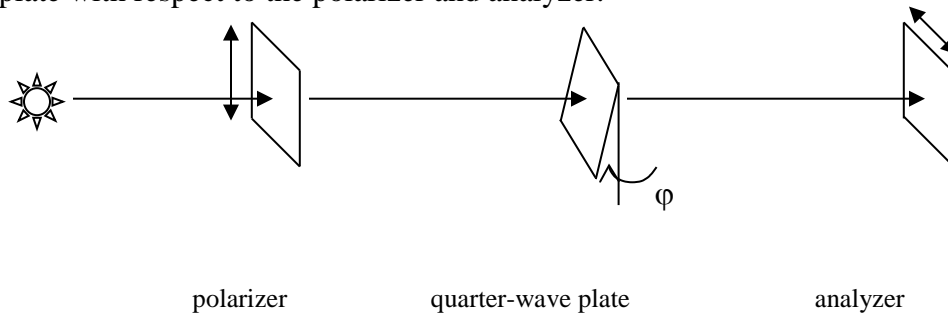


B. Now switch to a diode-laser light source. Is the diode laser output polarized? Combine two polarizing sheets, with the second sheet acting as an ‘analyzer’. Using an optical power meter, measure the transmitted power as a function of angle of the analyzer. Plot the results using a computer and determine the trigonometric function that best describes the data (use least-squares fit).

Q4. Two linear polarizers crossed at 90 degree with respect to each other should theoretically allow no light to pass through. Is this indeed the case? How well your single thin film polarizer rejects orthogonally polarized light? Be careful to account for any background light in the lab.

C. A quarter-wave plate is an optical element that introduces a relative phase shift of $\pi/2$ between orthogonal components of an incident wave. The reason this happens is that one component propagates through the plate more rapidly than the other. It should be apparent that linearly polarized light parallel to either principal axis will be phase-shifted but otherwise unaffected. If the incident wave is not aligned along either principal axis, a phase difference is developed between two orthogonal components. With the correct plate thickness with respect to the light wavelength, a $\pi/2$ phase difference can be obtained.

Using the following set-up, determine the optical axis of a quarter-wave plate by rotating the plate with respect to the polarizer and analyzer.



(Is it easier to continue to use the laser and power meter for the measurement or a lamp and your eye, or both?)

Q5. At what angle ϕ_0 do you expect to observe the least intensity?

Q6. Rotate the plate by 45° with respect to ϕ_0 . Do you expect this to be an intensity maximum? Why? Using the power meter, measure the intensity through the analyzer as you rotate the quarter-wave plate.

Q7. With the plate fixed at 45° with respect to ϕ_0 , what happens if you rotate the analyzer? Can you explain this effect?